

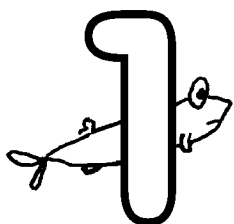


Add with Milt!



Know your numbers.
Count the fish.
Now you know
Milt's big wish,
that you do well in school!



How many fish
are with Milt? Count
them and see. _____

Milt is a fish too,
so add him to the
number you counted. _____
+



$2 + 2 = \underline{\quad}$

$3 + 2 = \underline{\quad}$

$4 + 2 = \underline{\quad}$

$3 + 3 = \underline{\quad}$

$4 + 3 = \underline{\quad}$

$5 + 2 = \underline{\quad}$

$6 + 4 = \underline{\quad}$

$7 + 4 = \underline{\quad}$

$8 + 3 = \underline{\quad}$

$6 + 2 = \underline{\quad}$

$2 + 3 = \underline{\quad}$

$5 + 4 = \underline{\quad}$